

ATELIER DE NUMÉRATION

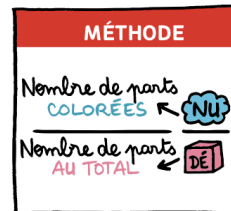
Lire, écrire, représenter et comparer avec 1 des fractions

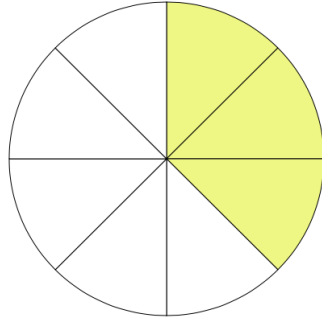
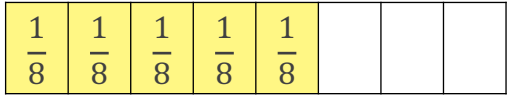
Consigne

À l'aide d'une pince à linge, indique les différentes écritures et/ou représentations de la fraction proposée.

Aide

On utilise une fraction quand une unité est partagée en parts égales.

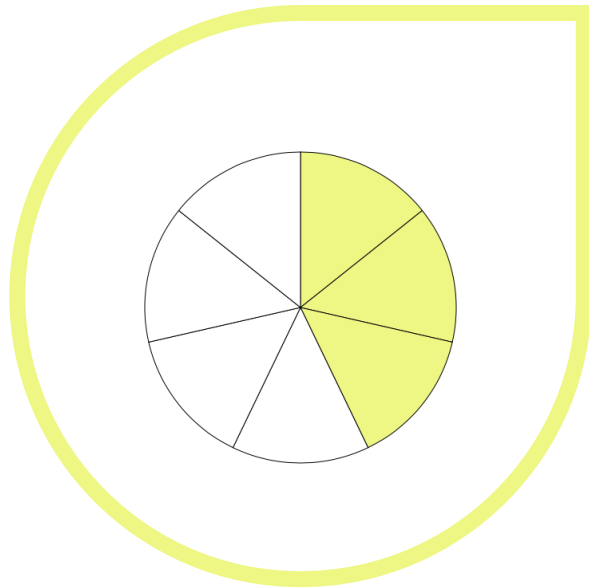
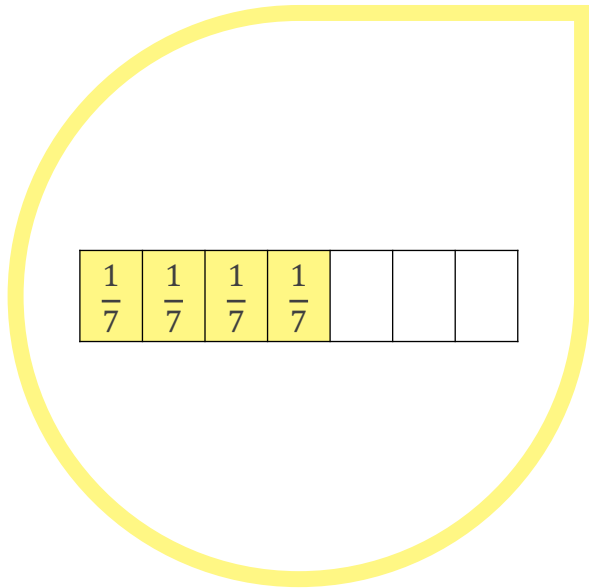




Trois
huitièmes

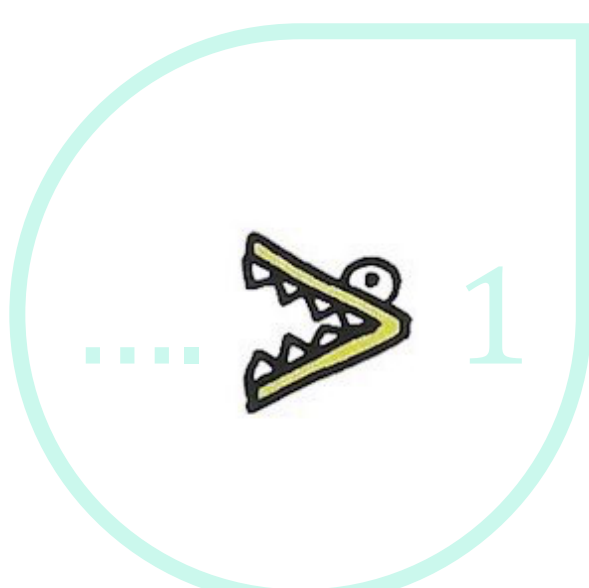
3
|
8

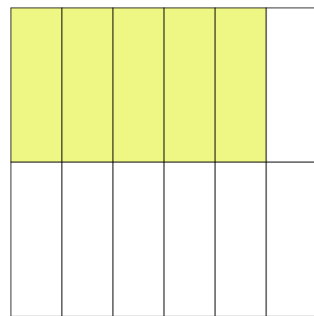
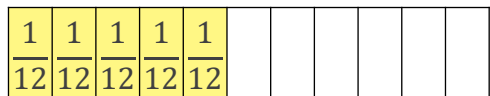




Quatre septièmes

$\frac{4}{7}$


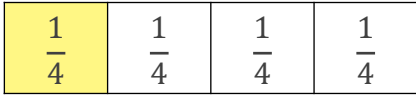




Cinquante
douzièmes

$$\frac{5}{12}$$

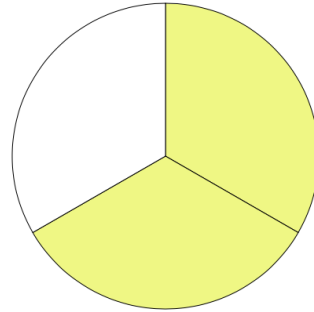
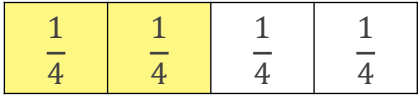




Un
quatrième

$\frac{1}{4}$



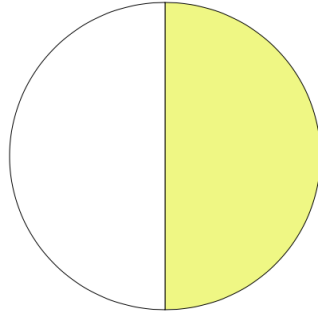


Deux
tiers

2
—
2



$\frac{1}{4}$	$\frac{1}{4}$	$\frac{1}{4}$	$\frac{1}{4}$
---------------	---------------	---------------	---------------

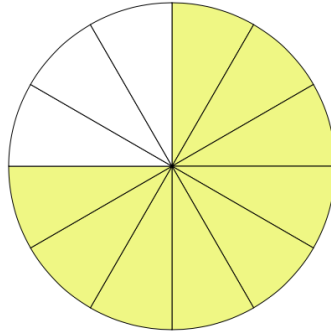


Un
deuxième

$\frac{1}{2}$



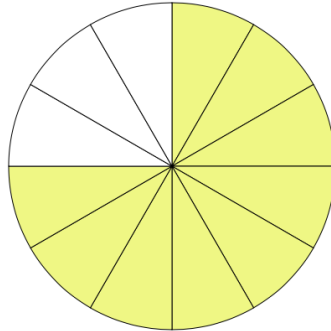
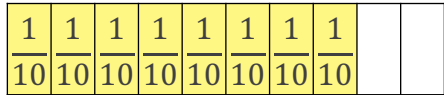
$\frac{1}{10}$	$\frac{1}{10}$	$\frac{1}{10}$	$\frac{1}{10}$	$\frac{1}{10}$	$\frac{1}{10}$	$\frac{1}{10}$	$\frac{1}{10}$		
----------------	----------------	----------------	----------------	----------------	----------------	----------------	----------------	--	--



Huit
dixièmes

$$\frac{8}{10}$$



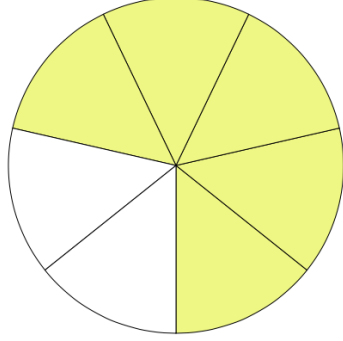


Neuf
douzièmes

$$\frac{9}{12}$$



$\frac{1}{7}$	$\frac{1}{7}$	$\frac{1}{7}$	$\frac{1}{7}$	$\frac{1}{7}$	$\frac{1}{7}$	$\frac{1}{7}$
---------------	---------------	---------------	---------------	---------------	---------------	---------------



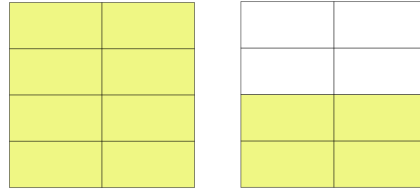
Sept
septièmes

5
7



$\frac{1}{8}$	$\frac{1}{8}$	$\frac{1}{8}$	$\frac{1}{8}$	$\frac{1}{8}$	$\frac{1}{8}$	$\frac{1}{8}$	$\frac{1}{8}$
---------------	---------------	---------------	---------------	---------------	---------------	---------------	---------------

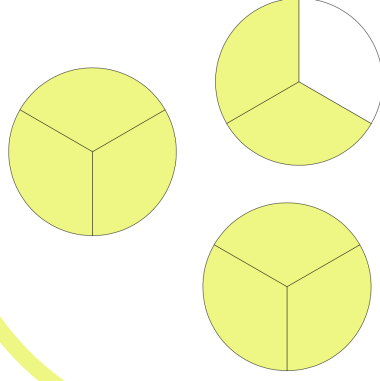
$\frac{1}{8}$	$\frac{1}{8}$	$\frac{1}{8}$	$\frac{1}{8}$	$\frac{1}{8}$	$\frac{1}{8}$	$\frac{1}{8}$	$\frac{1}{8}$
---------------	---------------	---------------	---------------	---------------	---------------	---------------	---------------



Douze
huitièmes

$$\frac{12}{16}$$


$\frac{1}{8}$ $\frac{1}{8}$ $\frac{1}{8}$ $\frac{1}{8}$ $\frac{1}{8}$ $\frac{1}{8}$ $\frac{1}{8}$ $\frac{1}{8}$

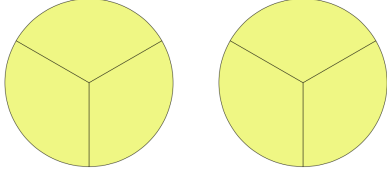


Huit
neuvièmes

3 | 8



$\frac{1}{4}$	$\frac{1}{4}$	$\frac{1}{4}$	$\frac{1}{4}$	$\frac{1}{4}$	$\frac{1}{4}$
---------------	---------------	---------------	---------------	---------------	---------------



Six
quarts

$$\frac{6}{4}$$

